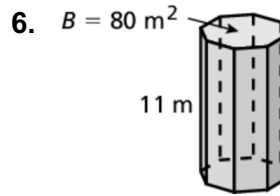
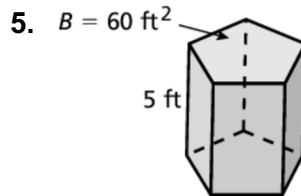
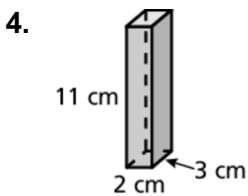
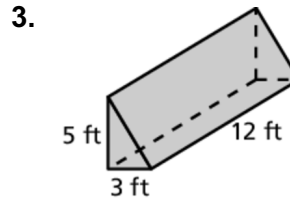
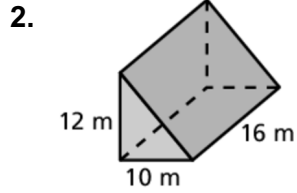
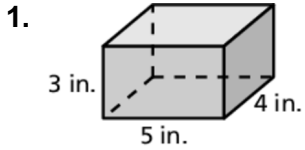


9.4

Practice

For use after Lesson 9.4

Find the volume of the prism.



7. Each box is shaped like a rectangular prism. Which has more storage space? Explain.

