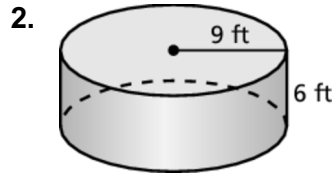
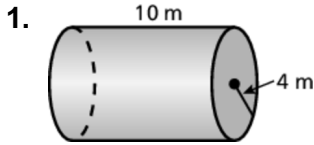


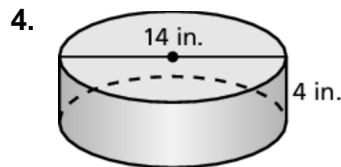
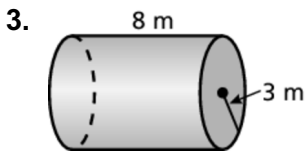
**9.3**

**Practice**  
For use after Lesson 9.3

Find the surface area of the cylinder. Round your answer to the nearest tenth.



Find the lateral surface area of the cylinder. Round your answer to the nearest tenth.



5. How much paper is used in the label for the can of cat food?  
Round your answer to the nearest whole number.

