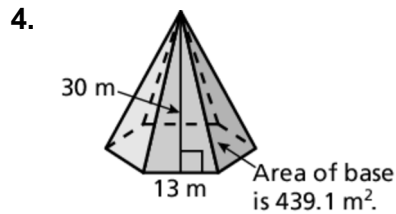
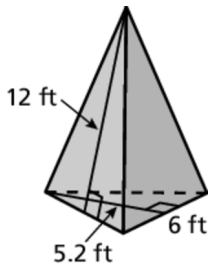
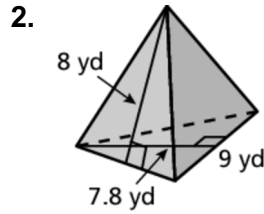
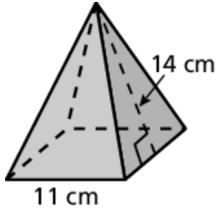


**9.2**

**Practice**  
For use after Lesson 9.2

Find the surface area of the regular pyramid.



5. The surface area of a triangular pyramid is 305 square inches. The area of the base is 35 square inches. Each face has a base of 9 inches. What is the slant height?