

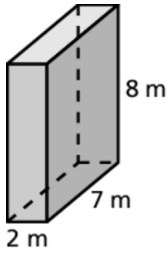
# 9.1

## Practice

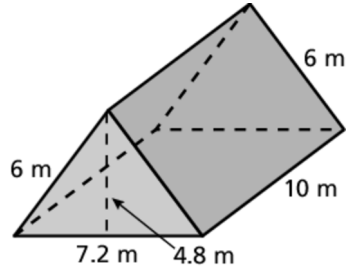
For use after Lesson 9.1

Find the surface area of the prism.

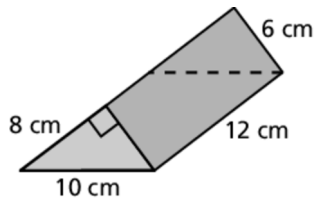
1.



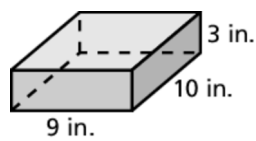
2.



3.



4.



5. You buy a ring box as a birthday gift that is in the shape of a triangular prism. What is the least amount of wrapping paper needed to wrap the box?

