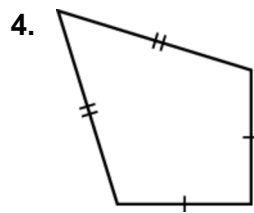
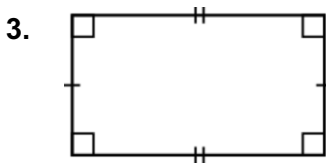
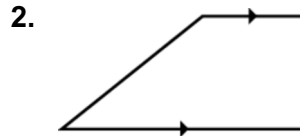
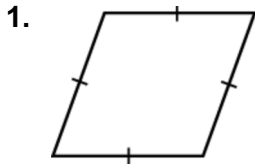


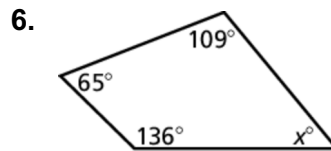
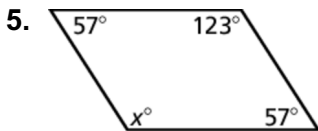
7.4

Practice
For use after Lesson 7.4

Classify the quadrilateral.



Find the value of x .



7. For a science fair, you are displaying your project on a trapezoidal piece of poster board. What is the measure of the missing angle?

