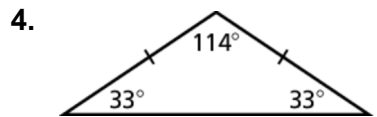
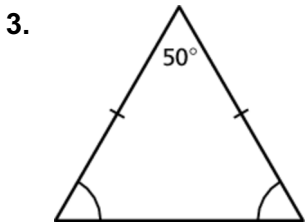
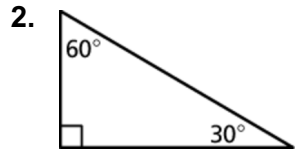
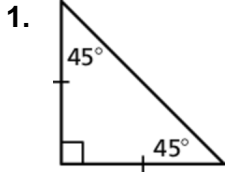


7.3

Practice
For use after Lesson 7.3

Classify the triangle.



5. What type of triangle must the hanger be to hang clothes evenly?

