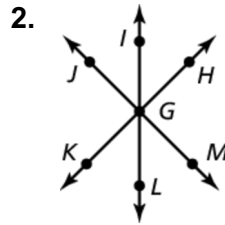
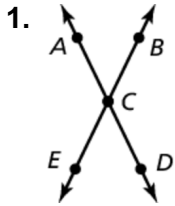


7.1

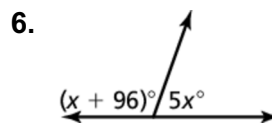
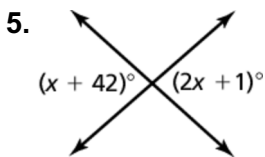
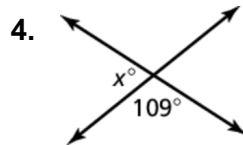
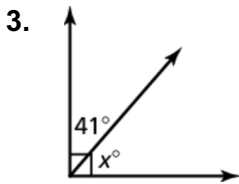
Practice

For use after Lesson 7.1

Name two pairs of adjacent angles and two pairs of vertical angles in the figure.



Tell whether the angles are *adjacent* or *vertical*. Then find the value of x .



7. A tree is leaning toward the ground. How many degrees does the tree have to fall before hitting the ground?

